

12.3. Worksheet

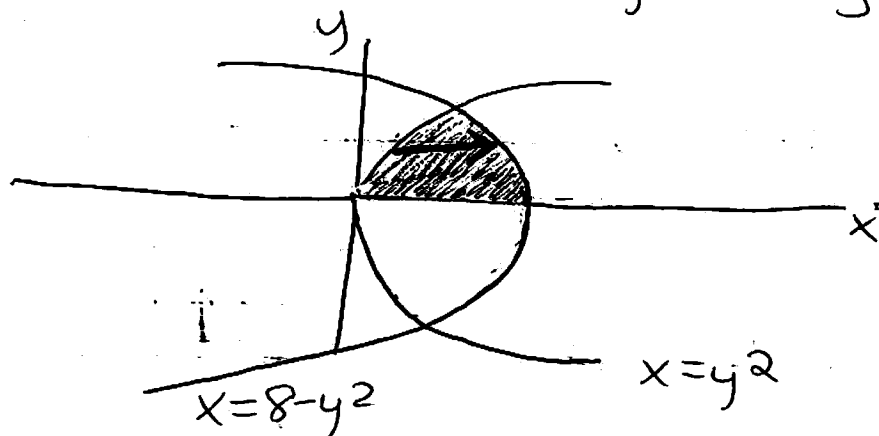
Setting up double integrals, reversing the order of integration, finding volumes

Setting up Double Integrals:

p900

19. $\iint_D y \, dA$, where D is the region in the 1st quadrant bounded by the parabolas $x=y^2$ and $x=8-y^2$

* Start these problems by drawing a picture



* This is what your book refers to as a Type II region (p845). Basically D is between $x=h_1(y)$ and $x=h_2(y)$. For these problems, draw an arrow from the left curve to the right curve. This gives us our x bounds,
 $y^2 \leq x \leq 8-y^2$

To find y just find the points of intersection of the curves.

$$8 - y^2 = y^2$$

$$8 = 2y^2$$

$$4 = y^2$$

$$y = 2$$

$$y = -2$$

not in the 1st quadrant

$$\iint_D y \, dA = \int_0^2 \int_{y^2}^{8-y^2} y \, dx \, dy$$

$$= \int_0^2 yx \Big|_{y^2}^{8-y^2} dy$$

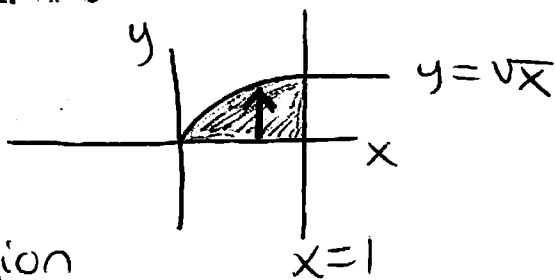
$$= \int_0^2 8y - y^3 - y^3 \, dy$$

$$= 4y^2 - \frac{2}{4}y^4 \Big|_0^2 = 16 - 8 = \boxed{8}$$

$$\iint_D \frac{y}{1+x^2} \, dA$$

$$y = \sqrt{x}, \quad y = 0, \quad x = 1$$

where D is bounded by



* First draw D .

* This is a Type 1 region and a type 2 region

* First we'll do it as a Type 1 (D is bounded by $y = h_1(x)$ and $y = h_2(x)$)

Draw an arrow from the bottom curve to the top curve, these are your y bounds

$$0 \leq y \leq \sqrt{x}$$

To find x remember that the outermost limits of integration must be constants. Just find the smallest & largest x can be.

$$\int_0^1 \int_0^{\sqrt{x}} \frac{y}{1+x^2} dy dx = \int_0^1 \frac{\frac{1}{2}y^2}{1+x^2} \Big|_0^{\sqrt{x}} dx$$

$$= \int_0^1 \frac{\frac{1}{2}x}{1+x^2} dx$$

$$u = 1+x^2 \quad du = 2x dx$$

$$\frac{1}{2} du = x dx$$

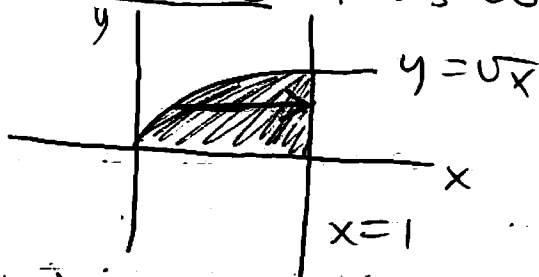
$$u(0) = 1+0^2 = 1$$

$$u(1) = 1+1^2 = 2$$

$$= \int_1^2 \frac{\frac{1}{4}}{u} du = \frac{1}{4} \ln|u| \Big|_1^2 = \frac{1}{4} \ln 2 - \frac{1}{4} \ln 1$$

$$= \boxed{\frac{1}{4} \ln 2}$$

Alternatively, you could have done this problem as a type 2 region. (it is harder this way)



* Draw an arrow going from the left curve to the right curve & solve for x if necessary to get

$$y^2 \leq x \leq 1$$

y goes from 0 to $\sqrt{1} = 1$.

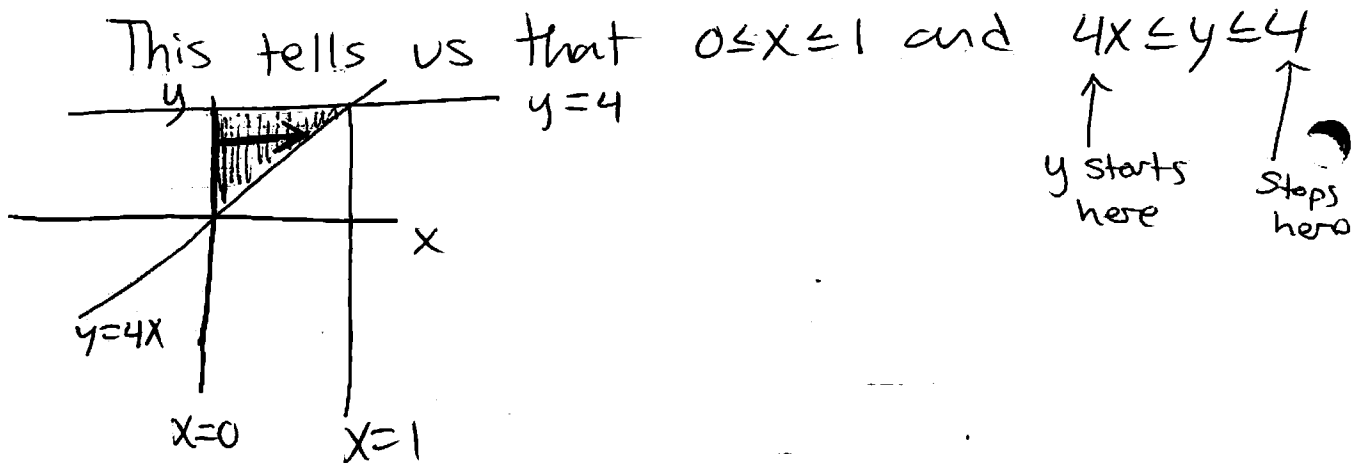
$$\int_0^1 \int_{y^2}^1 \frac{y}{1+x^2} dx dy$$

Reversing the Order of Integration?

p850

* To change the order of integration just draw D , the integrand doesn't matter!

34. $\int_0^1 \int_{4x}^4 f(x,y) dy dx$



* Since I want to have $dx dy$, I know x is the inside function. Draw an arrow from the left curve to the right curve & solve for x if necessary

$$0 \leq x \leq \frac{y}{4}$$

* $0 \leq y \leq 4$ ← biggest
↑ smallest y can be

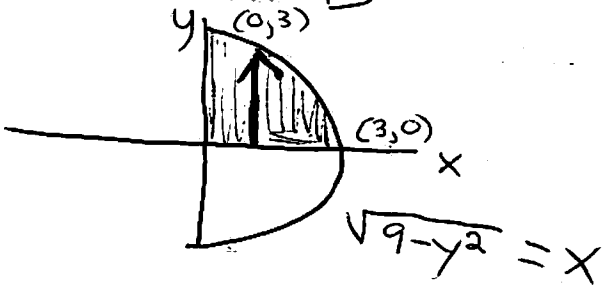
$$\int_0^1 \int_{4x}^4 f(x,y) dy dx = \int_0^4 \int_0^{y/4} f(x,y) dx dy$$

$$36. \int_0^3 \int_0^{\sqrt{9-y^2}} f(x,y) dx dy$$

$$0 \leq y \leq 3$$

$$0 \leq x \leq \sqrt{9-y^2}$$

* Draw Δ



* Draw an arrow from the bottom curve to the top curve and solve for y if necessary

$$0 \leq y \leq \sqrt{9-x^2}$$

$$0 \leq x \leq 3$$

$$\int_0^3 \int_0^{\sqrt{9-x^2}} f(x,y) dy dx$$

Volumes in Double Integrals

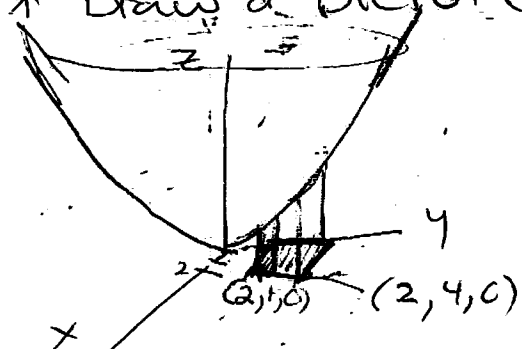
The volume of the solid that lies below the surface given by $z=f(x,y)$ and above the region D in the xy -plane is

$$V = \iint_D f(x,y) dA$$

p900 Find the volume of the given solid

29. Under the paraboloid $z=x^2+4y^2$ and above the rectangle $R=[0,2] \times [1,4]$

* Draw a picture

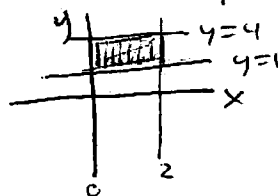


$$R = [0,2] \times [1,4]$$

tells us

$$0 \leq x \leq 2$$

$$1 \leq y \leq 4$$



$$\int_0^2 \int_1^4 x^2 + 4y^2 dy dx \quad \text{or} \quad \int_1^4 \int_0^2 x^2 + 4y^2 dx dy$$

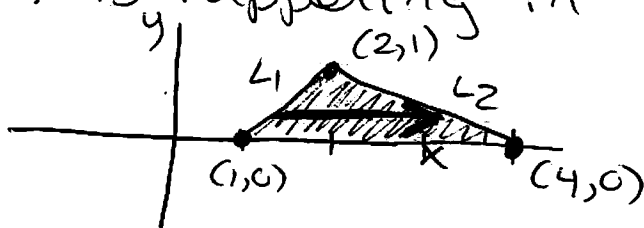
To evaluate this using a triple integral:

$$\int_0^2 \int_1^4 \int_0^{x^2+4y^2} 1 dz dy dx \quad \text{or} \quad \int_1^4 \int_0^2 \int_0^{x^2+4y^2} 1 dz dx dy$$

You can finish integrating these on your own.

30. Find the volume under the surface $z = x^2y$ and above the triangle in the xy -plane with vertices $(1, 0)$, $(2, 1)$ and $(4, 0)$

* We already know $f(x, y) = x^2y$ is our integrand so let's just figure out what is happening in the xy -plane



* This is another Type 2 regions, we draw an arrow from the left curve to the right curve.

So there are 2 lines we need to find equations for and then solve for x

$$m_1 = \frac{\Delta y}{\Delta x} = \frac{1-0}{2-1} = 1$$

$$y - y_1 = m(x - x_1) \quad y - 0 = 1(x - 1)$$

$$y = x - 1 \text{ is } L_1$$

$$m_2 = \frac{\Delta y}{\Delta x} = \frac{0-1}{4-2} = -\frac{1}{2}$$

$$y - y_1 = m(x - x_1) \quad y - 0 = -\frac{1}{2}(x - 4)$$

$$y = -\frac{1}{2}x + 2 \text{ is } L_2$$

* Solve L_1 and L_2 for x to get

$$\underbrace{x = y + 1}_{L_1} \quad \text{and} \quad \underbrace{x = -2y + 4}_{L_2}$$

$$y+1 \leq x \leq 4-2y$$

$$0 \leq y \leq 1$$

$$\int_0^1 \int_{y+1}^{4-2y} x^2 y \, dx \, dy$$

(This is a bit messy
when it comes to integration)